
Contents

Foreword	6
Chapter 1: Addition, Subtraction, Patterns and Graphs	
Skills Review 1	7
Skills Review 2	8
Skills Review 3	9
Skills Review 4	10
Skills Review 5	11
Skills Review 6	12
Skills Review 7	13
Skills Review 8	14
Skills Review 9	15
Skills Review 10	16
Skills Review 11	17
Chapter 2: Large Numbers and Place Value	
Skills Review 12	18
Skills Review 13	19
Skills Review 14	20
Skills Review 15	21
Skills Review 16	22
Skills Review 17	23
Skills Review 18	24
Skills Review 19	25
Skills Review 20	26
Chapter 3: Multi-Digit Multiplication	
Skills Review 21	27
Skills Review 22	28
Skills Review 23	29
Skills Review 24	30
Skills Review 25	31
Skills Review 26	32
Skills Review 27	33

Skills Review 28	34
Skills Review 29	35
Skills Review 30	36
Skills Review 31	37
Skills Review 32	38
Skills Review 33	39
Skills Review 34	40
Skills Review 35	41

Chapter 4: Time and Measuring

Skills Review 36	42
Skills Review 37	43
Skills Review 38	44
Skills Review 39	45
Skills Review 40	46
Skills Review 41	47
Skills Review 42	48
Skills Review 43	49
Skills Review 44	50
Skills Review 45	51
Skills Review 46	52
Skills Review 47	53
Skills Review 48	54

Chapter 5: Division

Skills Review 49	55
Skills Review 50	56
Skills Review 51	57
Skills Review 52	58
Skills Review 53	59
Skills Review 54	60
Skills Review 55	61
Skills Review 56	62
Skills Review 57	63
Skills Review 58	64
Skills Review 59	65
Skills Review 60	66
Skills Review 61	67
Skills Review 62	68
Skills Review 63	69

Skills Review 64	70
Skills Review 65	71
Chapter 6: Geometry	
Skills Review 66	72
Skills Review 67	73
Skills Review 68	74
Skills Review 69	75
Skills Review 70	76
Skills Review 71	77
Skills Review 72	78
Skills Review 73	79
Skills Review 74	80
Skills Review 75	81
Skills Review 76	82
Chapter 7: Fractions	
Skills Review 77	83
Skills Review 78	84
Skills Review 79	85
Skills Review 80	86
Skills Review 81	87
Skills Review 82	88
Skills Review 83	89
Skills Review 84	90
Chapter 8: Decimals	
Skills Review 85	91
Skills Review 86	92
Skills Review 87	93
Skills Review 88	94
Skills Review 89	95
Skills Review 90	96

Foreword

Math Mammoth Grade 4 Skills Review Workbook has been created to complement the lessons in *Math Mammoth Grade 4* complete curriculum. It gives the students practice in reviewing what they have already studied, so the concepts and skills will become more established in their memory.

These review worksheets are designed to provide a spiral review of the concepts in the curriculum. This means that after a concept or skill has been studied in the main curriculum, it is then reviewed repeatedly over time in several different worksheets of this book.

This book is divided into chapters, according to the corresponding chapters in the *Math Mammoth Grade 4* curriculum. You can choose exactly when to use the worksheets within the chapter, and how many of them to use. Not all students need all of these worksheets to help them keep their math skills fresh, so please vary the amount of worksheets you assign your student(s) according to their needs.

Each worksheet is designed to be one page, and includes a variety of exercises in a fun way without becoming too long and tedious.

The answer key is available as a separate book.

I wish you success in teaching math!

Maria Miller, the author

Skills Review 1

1. Add mentally.

a. $75 + 85 =$ _____	b. $43 + 38 =$ _____	c. $94 + 29 =$ _____
----------------------	----------------------	----------------------

2. Starting at the top, find your way through the maze by coloring the number that is **one half** of the previous number.

1,250	1,410	1,840	1,120	1,680
640	710	930	840	860
310	230	460	540	420
120	160	240	190	210
64	85	122	105	100

3. Subtract from whole hundreds.

a. $300 - 4 =$ _____
b. $700 - 6 =$ _____
c. $900 - 9 =$ _____

4. Damian and his two brothers shared unequally the cost of a used car. Damian paid \$2,715, Lyle paid \$1,847, and Steve paid \$2,069. How much did the car cost?

5. a. Carol baked 72 cookies. She gave some of them to Mrs. Harrison and now she has 48 left. How many cookies did she give to Mrs. Harrison? Use mental math.

b. The next morning, Carol counted the cookies and there were only 29 left. How many cookies had been eaten? Use mental math.

Puzzle Corner

What numbers are missing?

$$\begin{array}{r}
 5 \square 3 \square \\
 + \square 9 \square 6 \\
 \hline
 8602
 \end{array}$$

$$\begin{array}{r}
 26\square\square \\
 + \square\square 78 \\
 \hline
 4054
 \end{array}$$

Skills Review 2

1. Subtract in columns. Check by adding!

<p>a.</p> $\begin{array}{r} 705 \\ - 469 \\ \hline \end{array} \quad + \quad \begin{array}{r} 469 \\ \hline \end{array}$	<p>b.</p> $\begin{array}{r} 9250 \\ - 5835 \\ \hline \end{array} \quad + \quad \begin{array}{r} \\ \hline \end{array}$	<p>c.</p> $\begin{array}{r} 6013 \\ - 741 \\ \hline \end{array} \quad + \quad \begin{array}{r} \\ \hline \end{array}$
---	--	---

2. Alicia has \$240. Does she have enough money to buy a bike for \$190 and a helmet for \$45?

If yes, how much money does she have left?

If no, how much more money does she need?

3. Add in any order, and in parts. Use mental math.

<p>a. $85 + 5 + 9 + 70 + 8 + 32$</p>	<p>b. $216 + 90 + 7 + 3 + 4 + 300$</p>
--	--

4. Compare. Write $<$, $>$, or $=$ in the box.

a. $750 + 400$ $1400 - 250$

b. $7100 - 300$ $5800 + 800$

c. $2300 - 800$ $900 + 500$

d. $920 + 400$ $2020 - 600$

5. Multiply.

<p>a. $8 \times 2 = \underline{\quad}$</p> <p>$9 \times 9 = \underline{\quad}$</p> <p>$12 \times 5 = \underline{\quad}$</p>	<p>b. $6 \times 1 = \underline{\quad}$</p> <p>$11 \times 10 = \underline{\quad}$</p> <p>$5 \times 3 = \underline{\quad}$</p>	<p>c. $7 \times 8 = \underline{\quad}$</p> <p>$3 \times 4 = \underline{\quad}$</p> <p>$4 \times 12 = \underline{\quad}$</p>	<p>d. $2 \times 0 = \underline{\quad}$</p> <p>$10 \times 6 = \underline{\quad}$</p> <p>$5 \times 11 = \underline{\quad}$</p>
---	--	---	--

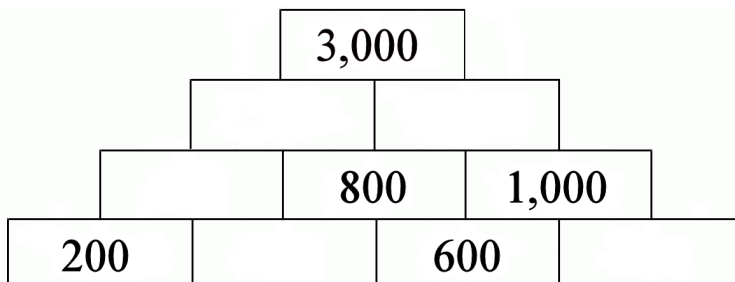
Skills Review 3

1. The mileage chart on the right shows the distances between a few Asian cities.

Mr. Wang is a businessman living in Hong Kong. One week, his job required him to travel from Hong Kong to Beijing, from Beijing to Tokyo, and then from Tokyo to Bangkok. How many miles did he travel in total?

	Beijing	Bangkok	Tokyo
Hong Kong	1,958	1,727	2,878
Beijing		3,294	2,091
Bangkok			4,600

2. Find the missing numbers. The sum of any two adjacent (side-by-side) numbers is the number directly above them.



3. Divide.

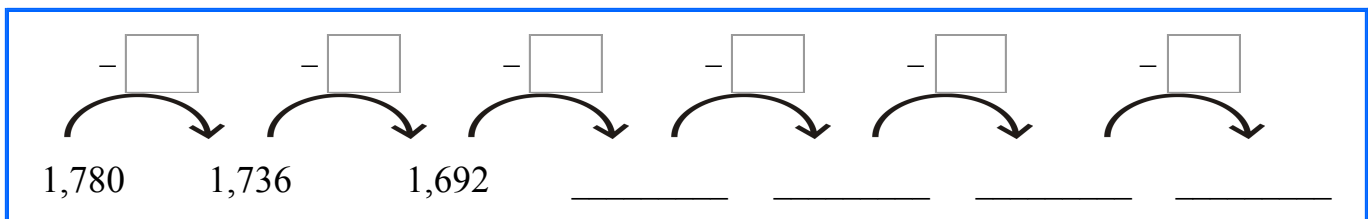
a. $28 \div 7 = \underline{\quad}$

b. $45 \div 9 = \underline{\quad}$

c. $30 \div 5 = \underline{\quad}$

d. $72 \div 12 = \underline{\quad}$

4. Figure out the pattern and continue it.



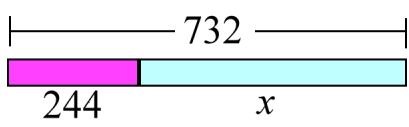
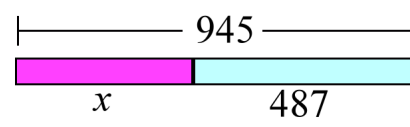
5. Farmer John has 1,348 sheep, separated into three flocks. One of the flocks has 430 sheep and another has 508 sheep. How many sheep does the third flock have?

Skills Review 4


1. First subtract, and then check by adding.

<p>a. $7,100 - 4,820 - 695$</p>	<p>Add to check:</p>
<p>b. $3,092 - 463 - 78$</p>	<p>Add to check:</p>

2. Write a missing addend problem that matches the bar model. Then solve it by subtracting.

<p>a.</p>  <p style="text-align: center;"> $\underline{\hspace{2cm}} + \underline{\hspace{2cm}} = \underline{\hspace{2cm}}$ $x = \underline{\hspace{2cm}} - \underline{\hspace{2cm}} = \underline{\hspace{2cm}}$ </p>	<p>b.</p>  <p style="text-align: center;"> $\underline{\hspace{2cm}} + \underline{\hspace{2cm}} = \underline{\hspace{2cm}}$ $x = \underline{\hspace{2cm}} - \underline{\hspace{2cm}} = \underline{\hspace{2cm}}$ </p>
---	--

3. Find the missing numbers. The sum of the petals on each flower should equal the number in the center.



4. Write each number as a sum of its parts: thousands, hundreds, tens, and ones.

<p>a. $7,948 =$</p>	<p>b. $3,092 =$</p>
---------------------------------------	---------------------------------------

Skills Review 5

1. Calculate in the right order.

a. $6 \times 8 + 12 \div 3 = \underline{\hspace{2cm}}$

b. $3 \times (11 - 3) \div 4 = \underline{\hspace{2cm}}$

c. $90 - 7 \times 7 = \underline{\hspace{2cm}}$

2. Add or subtract mentally in parts.

a. $960 + 350 = \underline{\hspace{2cm}}$

b. $2,000 - 406 = \underline{\hspace{2cm}}$

c. $700 - 43 = \underline{\hspace{2cm}}$

3. First, fill in the top row, continuing the pattern it has. Then add 69 to each number in the top row to get the number in the bottom row. *Hint: Instead of adding 69, add $\underline{\hspace{1cm}}$, and then subtract $\underline{\hspace{1cm}}$!*

n	730	690	650	610	570			
$n + 69$								

4. Solve. Write a number sentence for each problem. Do not just write the answer.

a. Clayton had 54 cherries. He and five of his friends shared them equally. How many did each child get?

b. Clayton and his friends EACH ate four cherries and saved the rest for later. In total, how many cherries did the children save for later?

5. Divide.

a. $100 \div 10 = \underline{\hspace{2cm}}$

b. $36 \div 4 = \underline{\hspace{2cm}}$

c. $84 \div 7 = \underline{\hspace{2cm}}$

Puzzle Corner

Emma was organizing rows of chairs for a seminar. She arranged nine chairs in each of three rows and eight chairs in each of seven rows. Then, her boss asked her to remove one chair from each row. How many chairs were left? Write a number sentence.

Skills Review 6

1. Subtract in columns. Check by adding!

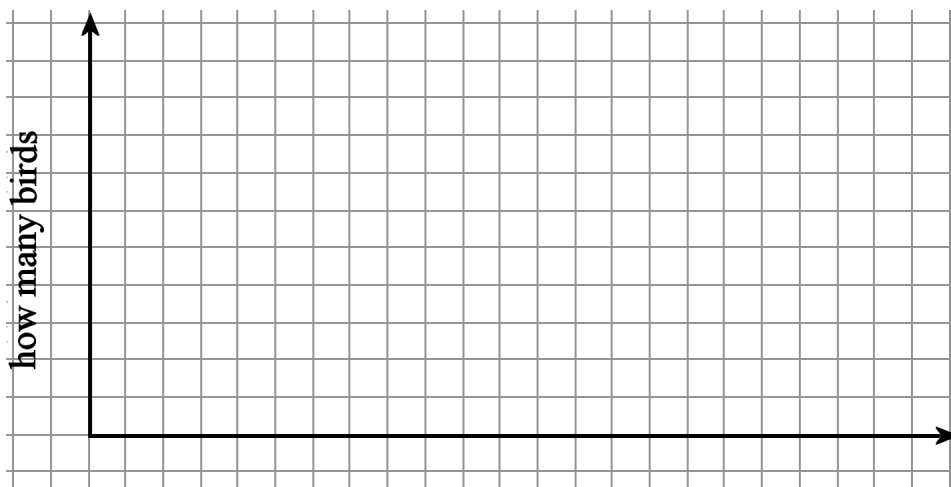
$$\begin{array}{r} 703 \\ - 495 \\ \hline \end{array} \quad + \quad \underline{\hspace{2cm}}$$

2. Fill in the table.

×	4	7	9	6	8	12
6						
8						
4						
9						

3. Karen went on a nature hike. Each time she saw a bird, she wrote down what kind it was. Using her list (below), complete the frequency chart and make a bar graph.

dove dove dove dove dove dove sparrow sparrow sparrow sparrow sparrow sparrow
sparrow sparrow crow crow crow crow hawk hawk robin robin robin robin robin



Bird	Frequency
dove	
sparrow	
crow	
hawk	
robin	

What numbers can go into the puzzle?

Puzzle Corner

3,780	-		+		= 3,810
-		+		-	
	+		+		= 120
+		-		+	
	+		+		= 200
=		=		=	
3,750		10		150	

Skills Review 7

1. Circle the number sentence that fits the problem. Then solve for x .

a. Alex bought a bike for \$95 and now he has \$238 left.

$$x - 95 = 238 \quad \text{OR} \quad 238 - 95 = x$$

$$x = \underline{\hspace{2cm}}$$

b. Farmer Benson had 128 cows. Then he bought 33 more.

$$x + 33 = 128 \quad \text{OR} \quad 128 + 33 = x$$

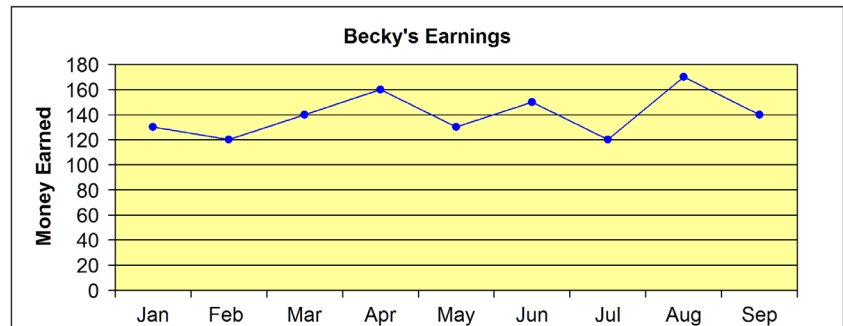
$$x = \underline{\hspace{2cm}}$$

2. A cruise ship has 4,215 people on board. They are passengers, crew members, and two doctors. If there are 1,346 crew members, how many passengers are there?

3. The line graph shows how much money Becky earned each month walking her neighbors' dogs.

a. During which month did Becky earn the most money?

b. How much money in total did Becky earn during the months of February, March, and April?



4. Megan tried to complete this pattern, but she got confused! Find her mistakes and correct them.

n	330	370	410	450	490	530	570	610
$n + 79$	409	449	489	539	569	619	659	689

5. Add. Write the numbers under each other, carefully aligning the ones, tens, hundreds, and thousands. You may use a separate piece of paper if you prefer.

$$6,830 + 1,597 + 305 + 28$$

Skills Review 8

1. Round these numbers to the nearest ten, nearest hundred, and nearest thousand.

<i>n</i>	95	4,762	344
rounded to nearest 10			
rounded to nearest 100			
rounded to nearest 1000			

2. Subtract and compare the results.
The problems are “related”
– can you see how?

$$14 - 6 = \underline{\hspace{2cm}}$$

$$64 - 6 = \underline{\hspace{2cm}}$$

$$142 - 60 = \underline{\hspace{2cm}}$$

$$1,430 - 600 = \underline{\hspace{2cm}}$$

3. Write four different subtraction problems that are “related” to the problem $12 - 7 = 5$.
See the examples above in exercise 2!

4. Put operation symbols +, −, or × into the number sentences so that they become true.

a. $9 \square 7 \square 8 = 71$

b. $8 \square (32 \square 29) \square 24 = 0$

c. $(9 \square 6) \square 4 = 60$

d. $6 \square 12 \square (41 \square 9) = 104$

5. Divide.

a. $42 \div 6 = \underline{\hspace{2cm}}$

b. $100 \div 10 = \underline{\hspace{2cm}}$

c. $36 \div 4 = \underline{\hspace{2cm}}$

d. $56 \div 8 = \underline{\hspace{2cm}}$

e. $15 \div 3 = \underline{\hspace{2cm}}$

6. Solve $7,213 - 3,975 - 648$. Lastly, check by adding.